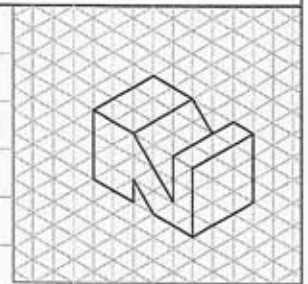
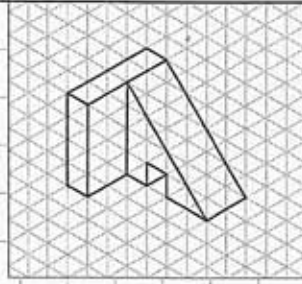
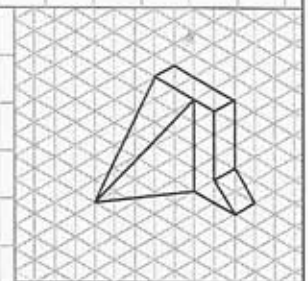
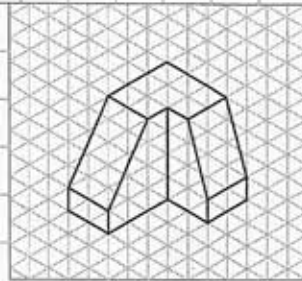


Problem 2-20: Sketch the front, top, and right-side views of each of the pictorial objects shown. One corner of each view is marked. One block on the pictorial grid is equal to one block on the three-view drawing.



WEDGE BLOCK

N-BLOCK



CORNER BLOCK

SPACER BLOCK

SKETCHING

DRAWN BY

DATE

DWG NO.